

さくらんぼ

COCORO相談室教材



$$\begin{array}{c} \text{10} \quad \text{1} \\ \swarrow \quad \searrow \\ \text{11} - 2 = 8 \end{array}$$

$$\begin{array}{c} \text{10} \quad \text{1} \\ \swarrow \quad \searrow \\ \text{11} - 3 = 7 \end{array}$$

$$\begin{array}{c} \text{10} \quad \text{1} \\ \swarrow \quad \searrow \\ \text{11} - 4 = 6 \end{array}$$

$$\begin{array}{c} \text{10} \quad \text{1} \\ \swarrow \quad \searrow \\ \text{11} - 5 = 5 \end{array}$$

さくらんぼ

COCORO相談室教材



$$11 - 3 =$$

↙ ↘

10 1 7

$$12 - 3 =$$

↙ ↘

10 2 7

$$12 - 4 =$$

↙ ↘

10 2 6

$$11 - 4 =$$

↙ ↘

10 1 6

さくらんぼ

COCORO相談室教材



$$12 - 3 =$$

10 2 7

$$12 - 2 =$$

10 2 8

$$13 - 4 =$$

10 3 6

$$11 - 2 =$$

10 1 8

さくらんぼ

COCORO相談室教材



$$12 - 4 = 6$$

10 2

$$13 - 2 = 8$$

10 3

$$11 - 4 = 6$$

10 1

$$11 - 3 = 7$$

10 1

さくらんぼ

COCORO相談室教材



$$12 - 4 =$$

↙ ↘
10 2 6

$$15 - 5 =$$

↙ ↘
10 5 5

$$13 - 5 =$$

↙ ↘
10 3 5

$$14 - 5 =$$

↙ ↘
10 4 5

さくらんぼ

COCORO相談室教材



$$12 - 5 =$$

10 2 5

$$14 - 5 =$$

10 4 5

$$13 - 5 =$$

10 3 5

$$11 - 4 =$$

10 1 6

さくらんぼ

COCORO相談室教材



$$12 - 3 =$$

$$\begin{array}{c} \swarrow \quad \searrow \\ 10 \quad 2 \end{array} \quad 7$$

$$14 - 6 =$$

$$\begin{array}{c} \swarrow \quad \searrow \\ 10 \quad 4 \end{array} \quad 4$$

$$13 - 4 =$$

$$\begin{array}{c} \swarrow \quad \searrow \\ 10 \quad 3 \end{array} \quad 6$$

$$11 - 5 =$$

$$\begin{array}{c} \swarrow \quad \searrow \\ 10 \quad 1 \end{array} \quad 5$$

さくらんぼ

COCORO相談室教材



$$15 - 6 =$$

10 5 4

$$14 - 8 =$$

10 4 2

$$13 - 5 =$$

10 3 5

$$12 - 5 =$$

10 2 5

さくらんぼ

COCORO相談室教材



$$15 - 8 =$$

10 5 2

$$14 - 6 =$$

10 4 4

$$13 - 7 =$$

10 3 3

$$12 - 6 =$$

10 2 4

さくらんぼ

COCORO相談室教材



$$18 - 9 =$$

Diagram showing the decomposition of 18 into 10 and 8. Arrows point from the 1 and 8 of 18 to the 10 and 8 below. A vertical line is drawn under the 9.

$$14 - 7 =$$

Diagram showing the decomposition of 14 into 10 and 4. Arrows point from the 1 and 4 of 14 to the 10 and 4 below. A vertical line is drawn under the 7.

$$13 - 5 =$$

Diagram showing the decomposition of 13 into 10 and 3. Arrows point from the 1 and 3 of 13 to the 10 and 3 below. A vertical line is drawn under the 5.

$$16 - 7 =$$

Diagram showing the decomposition of 16 into 10 and 6. Arrows point from the 1 and 6 of 16 to the 10 and 6 below. A vertical line is drawn under the 7.

さくらんぼ

COCORO相談室教材



$$15 - 6 =$$

Diagram showing the decomposition of 15 into 10 and 5, and the subtraction of 6 from 15 to result in 9.

$$\begin{array}{r} \swarrow \searrow \\ 10 \quad 5 \\ 10 \quad 5 \end{array} \quad \begin{array}{r} 4 \\ 4 \end{array}$$

$$14 - 8 =$$

Diagram showing the decomposition of 14 into 10 and 4, and the subtraction of 8 from 14 to result in 6.

$$\begin{array}{r} \swarrow \searrow \\ 10 \quad 4 \\ 10 \quad 4 \end{array} \quad \begin{array}{r} 2 \\ 2 \end{array}$$

$$13 - 5 =$$

Diagram showing the decomposition of 13 into 10 and 3, and the subtraction of 5 from 13 to result in 8.

$$\begin{array}{r} \swarrow \searrow \\ 10 \quad 3 \\ 10 \quad 3 \end{array} \quad \begin{array}{r} 5 \\ 5 \end{array}$$

$$12 - 7 =$$

Diagram showing the decomposition of 12 into 10 and 2, and the subtraction of 7 from 12 to result in 5.

$$\begin{array}{r} \swarrow \searrow \\ 10 \quad 2 \\ 10 \quad 2 \end{array} \quad \begin{array}{r} 3 \\ 3 \end{array}$$

さくらんぼ

COCORO相談室教材



$$15 - 8 =$$

10 5 2

$$16 - 8 =$$

10 6 2

$$13 - 8 =$$

10 3 2

$$12 - 9 =$$

10 2 1

さくらんぼ

COCORO相談室教材



$$15 - 8 =$$

$\swarrow \searrow$
 10 5 2

$$17 - 9 =$$

$\swarrow \searrow$
 10 7 1

$$16 - 8 =$$

$\swarrow \searrow$
 10 6 2

$$12 - 9 =$$

$\swarrow \searrow$
 10 2 1

さくらんぼ

COCORO相談室教材



$$14 - 8 =$$

$\swarrow \searrow$
 10 4 2

$$15 - 9 =$$

$\swarrow \searrow$
 10 5 1

$$16 - 7 =$$

$\swarrow \searrow$
 10 6 3

$$18 - 9 =$$

$\swarrow \searrow$
 10 8 1

さくらんぼ

COCORO相談室教材



$$13 - 8 =$$

10 3 2

$$17 - 8 =$$

10 7 2

$$16 - 7 =$$

10 6 3

$$15 - 8 =$$

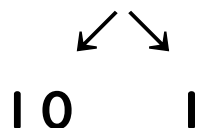
10 5 2

さくらんぼ

COCORO相談室教材

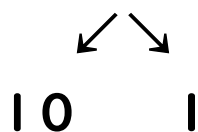


$$11 - 2 =$$



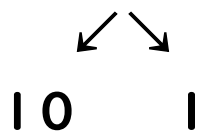
8

$$21 - 3 =$$



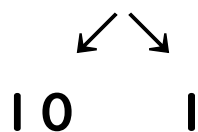
7

$$31 - 4 =$$



6

$$41 - 5 =$$



5

さくらんぼ

COCORO相談室教材



$$51 - 3 =$$

$$\begin{array}{r} \swarrow \searrow \\ 10 \quad 1 \end{array} \quad 7$$

$$62 - 3 =$$

$$\begin{array}{r} \swarrow \searrow \\ 10 \quad 2 \end{array} \quad 7$$

$$72 - 4 =$$

$$\begin{array}{r} \swarrow \searrow \\ 10 \quad 2 \end{array} \quad 6$$

$$81 - 4 =$$

$$\begin{array}{r} \swarrow \searrow \\ 10 \quad 1 \end{array} \quad 6$$

さくらんぼ

COCORO相談室教材



$$52 - 3 =$$

↙ ↘
10 2

7

$$82 - 2 =$$

↙ ↘
10 2

8

$$43 - 4 =$$

↙ ↘
10 3

6

$$91 - 2 =$$

↙ ↘
10 1

8

さくらんぼ

COCORO相談室教材



$$23 - 5 =$$

↙ ↘
10 3

5

$$37 - 8 =$$

↙ ↘
10 7

2

$$46 - 7 =$$

↙ ↘
10 6

3

$$35 - 8 =$$

↙ ↘
10 5

2

さくらんぼ

COCORO相談室教材



$$24 - 8 =$$

$$\begin{array}{cc} \swarrow & \searrow \\ 10 & 4 \\ & 2 \end{array}$$

$$45 - 9 =$$

$$\begin{array}{cc} \swarrow & \searrow \\ 10 & 5 \\ & 1 \end{array}$$

$$76 - 7 =$$

$$\begin{array}{cc} \swarrow & \searrow \\ 10 & 6 \\ & 3 \end{array}$$

$$38 - 9 =$$

$$\begin{array}{cc} \swarrow & \searrow \\ 10 & 8 \\ & 1 \end{array}$$

さくらんぼ

COCORO相談室教材



$$65 - 8 =$$

↙ ↘
10 5

2

$$87 - 9 =$$

↙ ↘
10 7

1

$$46 - 8 =$$

↙ ↘
10 6

2

$$32 - 9 =$$

↙ ↘
10 2

1

さくらんぼ

COCORO相談室教材



$$25 - 6 =$$

↙ ↘
10 5

4

$$44 - 8 =$$

↙ ↘
10 4

2

$$53 - 5 =$$

↙ ↘
10 3

5

$$92 - 7 =$$

↙ ↘
10 2

3

さくらんぼ

COCORO相談室教材



$$82 - 4 =$$

↙ ↘
10 2

6

$$53 - 2 =$$

↙ ↘
10 3

8

$$91 - 4 =$$

↙ ↘
10 1

6

$$61 - 3 =$$

↙ ↘
10 1

7

さくらんぼ

COCORO相談室教材



$$54 - 8 =$$

$$\begin{array}{r} \swarrow \searrow \\ 10 \quad 4 \end{array} \quad \begin{array}{r} 2 \end{array}$$

$$35 - 9 =$$

$$\begin{array}{r} \swarrow \searrow \\ 10 \quad 5 \end{array} \quad \begin{array}{r} 1 \end{array}$$

$$86 - 7 =$$

$$\begin{array}{r} \swarrow \searrow \\ 10 \quad 6 \end{array} \quad \begin{array}{r} 3 \end{array}$$

$$8 - 9 =$$


$$\begin{array}{r} \swarrow \searrow \\ 10 \quad 8 \end{array} \quad \begin{array}{r} 1 \end{array}$$

さくらんぼ


COCORO相談室教材



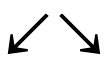
$$14 - 8 =$$


$$10 \quad 4$$


$$17 - 9 =$$


$$10 \quad 7$$

$$16 - 8 =$$


$$10 \quad 6$$

$$15 - 6 =$$


$$10 \quad 5$$

さくらんぼ

COCORO相談室教材



$$12 - 8 =$$

$$\begin{array}{c} \swarrow \searrow \\ 10 \quad 2 \end{array}$$

$$14 - 9 =$$

$$\begin{array}{c} \swarrow \searrow \\ 10 \quad 4 \end{array}$$

$$16 - 9 =$$

$$\begin{array}{c} \swarrow \searrow \\ 10 \quad 6 \end{array}$$

$$15 - 8 =$$

$$\begin{array}{c} \swarrow \searrow \\ 10 \quad 5 \end{array}$$

さくらんぼ

COCORO相談室教材



$$13 - 8 =$$

$$\begin{array}{c} \swarrow \quad \searrow \\ 10 \quad 3 \end{array}$$

$$14 - 7 =$$

$$\begin{array}{c} \swarrow \quad \searrow \\ 10 \quad 4 \end{array}$$

$$16 - 8 =$$

$$\begin{array}{c} \swarrow \quad \searrow \\ 10 \quad 6 \end{array}$$

$$15 - 7 =$$

$$\begin{array}{c} \swarrow \quad \searrow \\ 10 \quad 5 \end{array}$$

さくらんぼ

COCORO相談室教材



$$12 - 4 =$$

A diagram showing the number 12 decomposed into 10 and 2. Two arrows point from the top of the '12' down to '10' and '2' respectively.

$$10 \quad 2$$

$$11 - 7 =$$

A diagram showing the number 11 decomposed into 10 and 1. Two arrows point from the top of the '11' down to '10' and '1' respectively.

$$10 \quad 1$$

$$16 - 8 =$$

A diagram showing the number 16 decomposed into 10 and 6. Two arrows point from the top of the '16' down to '10' and '6' respectively.

$$10 \quad 6$$

$$18 - 9 =$$

A diagram showing the number 18 decomposed into 10 and 8. Two arrows point from the top of the '18' down to '10' and '8' respectively.

$$10 \quad 8$$

さくらんぼ

COCORO相談室教材



$$13 - 5 =$$

$$\begin{array}{c} \swarrow \quad \searrow \\ 10 \quad 3 \end{array}$$

$$14 - 8 =$$

$$\begin{array}{c} \swarrow \quad \searrow \\ 10 \quad 4 \end{array}$$

$$16 - 9 =$$

$$\begin{array}{c} \swarrow \quad \searrow \\ 10 \quad 6 \end{array}$$

$$12 - 8 =$$

$$\begin{array}{c} \swarrow \quad \searrow \\ 10 \quad 2 \end{array}$$

さくらんぼ

COCORO相談室教材



$$51 - 8 =$$

$$\begin{array}{r} \swarrow \searrow \\ 10 \quad 1 \end{array}$$

$$26 - 7 =$$

$$\begin{array}{r} \swarrow \searrow \\ 10 \quad 6 \end{array}$$

$$43 - 5 =$$

$$\begin{array}{r} \swarrow \searrow \\ 10 \quad 3 \end{array}$$

$$35 - 9 =$$

$$\begin{array}{r} \swarrow \searrow \\ 10 \quad 5 \end{array}$$

さくらんぼ

COCORO相談室教材



$$66 - 9 =$$

↙ ↘
10 6

$$85 - 8 =$$

↙ ↘
10 5

$$23 - 7 =$$

↙ ↘
10 3

$$31 - 6 =$$

↙ ↘
10 1

さくらんぼ

COCORO相談室教材



$$52 - 7 =$$

↙ ↘
10 2

$$65 - 6 =$$

↙ ↘
10 5

$$93 - 8 =$$

↙ ↘
10 3

$$24 - 9 =$$

↙ ↘
10 4

さくらんぼ

COCORO相談室教材



$$81 - 7 =$$

↙ ↘
10 1

$$36 - 9 =$$

↙ ↘
10 6

$$75 - 6 =$$

↙ ↘
10 5

$$68 - 9 =$$

↙ ↘
10 8

さくらんぼ

COCORO相談室教材



$$42 - 9 =$$

↙ ↘
10 2

$$25 - 7 =$$

↙ ↘
10 5

$$53 - 6 =$$

↙ ↘
10 3

$$34 - 8 =$$

↙ ↘
10 4

さくらんぼ

COCORO相談室教材



COCORO相談室 Web QRコード

$$64 - 8 =$$

$$10 \quad 4$$

$$37 - 9 =$$

$$10 \quad 7$$

$$86 - 8 =$$

$$10 \quad 6$$

$$45 - 6 =$$

$$10 \quad 5$$

さくらんぼ

COCORO相談室教材



$$54 - 23 =$$

$$37 - 17 =$$

$$86 - 35 =$$

$$98 - 55 =$$

$$76 - 26 =$$

さくらんぼ

COCORO相談室教材



$$34 - 14 =$$

$$33 - 24 =$$

$$86 - 16 =$$

$$24 - 15 =$$

$$66 - 33 =$$

さくらんぼ

COCORO相談室教材



$$93 - 72 =$$

$$46 - 14 =$$

$$36 - 17 =$$

$$52 - 31 =$$

$$86 - 26 =$$

さくらんぼ

COCORO相談室教材



$$55 - 26 =$$

$$38 - 27 =$$

$$92 - 33 =$$

$$46 - 27 =$$

$$83 - 55 =$$

さくらんぼ

COCORO相談室教材



$$25 - 16 =$$

$$48 - 37 =$$

$$72 - 23 =$$

$$53 - 23 =$$

$$63 - 24 =$$